

**Determine the amount of money described.****Answers**

- 1) If you have 1 ten dollar bill, 3 one dollar bills and 2 five dollar bills, how many dollars do you have?
- 2) If you have 2 ten dollar bills, 4 one dollar bills and 3 five dollar bills, how many dollars do you have?
- 3) If you have 2 ten dollar bills, 1 one dollar bill and 3 five dollar bills, how many dollars do you have?
- 4) If you have 1 one dollar bill, 4 ten dollar bills and 3 five dollar bills, how many dollars do you have?
- 5) If you have 2 quarters, 1 dime and 3 pennies, how many cents do you have?
- 6) If you have 1 quarter, 3 dimes and 3 pennies, how many cents do you have?
- 7) If you have 1 quarter, 1 dime and 1 penny, how many cents do you have?
- 8) If you have 2 quarters, 1 nickel and 1 penny, how many cents do you have?
- 9) If you have 1 ten dollar bill, 2 quarters and 4 dimes, how much money do you have?
- 10) If you have 1 quarter, 4 nickels and 3 pennies, how much money do you have?
- 11) If you have 1 ten dollar bill, 3 dimes and 4 pennies, how much money do you have?
- 12) If you have 1 ten dollar bill, 4 one dollar bills and 3 nickels, how much money do you have?

1. _____
2. _____
3. _____
4. _____
5. _____
6. _____
7. _____
8. _____
9. _____
10. _____
11. _____
12. _____



Determine the amount of money described.

Answers

\$36	\$39	\$23	56 ¢	63 ¢
58 ¢	\$56	36 ¢	\$10.90	\$0.48

1) If you have 1 ten dollar bill, 3 one dollar bills and 2 five dollar bills, how many dollars do you have?

1. _____

2) If you have 2 ten dollar bills, 4 one dollar bills and 3 five dollar bills, how many dollars do you have?

2. _____

3) If you have 2 ten dollar bills, 1 one dollar bill and 3 five dollar bills, how many dollars do you have?

3. _____

4) If you have 1 one dollar bill, 4 ten dollar bills and 3 five dollar bills, how many dollars do you have?

4. _____

5) If you have 2 quarters, 1 dime and 3 pennies, how many cents do you have?

5. _____

6) If you have 1 quarter, 3 dimes and 3 pennies, how many cents do you have?

6. _____

7) If you have 1 quarter, 1 dime and 1 penny, how many cents do you have?

7. _____

8) If you have 2 quarters, 1 nickel and 1 penny, how many cents do you have?

8. _____

9) If you have 1 ten dollar bill, 2 quarters and 4 dimes, how much money do you have?

9. _____

10) If you have 1 quarter, 4 nickels and 3 pennies, how much money do you have?

10. _____

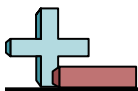


Determine the amount of money described.

Answers

- 1) If you have 3 ten dollar bills, 4 five dollar bills and 2 one dollar bills, how many dollars do you have?
- 2) If you have 2 five dollar bills, 2 ten dollar bills and 2 one dollar bills, how many dollars do you have?
- 3) If you have 1 five dollar bill, 2 one dollar bills and 2 ten dollar bills, how many dollars do you have?
- 4) If you have 3 ten dollar bills, 1 one dollar bill and 1 five dollar bill, how many dollars do you have?
- 5) If you have 3 quarters, 2 dimes and 3 pennies, how many cents do you have?
- 6) If you have 2 quarters, 3 dimes and 2 pennies, how many cents do you have?
- 7) If you have 1 quarter, 3 nickels and 2 pennies, how many cents do you have?
- 8) If you have 3 quarters, 2 nickels and 3 pennies, how many cents do you have?
- 9) If you have 1 ten dollar bill, 1 five dollar bill and 3 quarters, how much money do you have?
- 10) If you have 3 dimes, 2 nickels and 2 pennies, how much money do you have?
- 11) If you have 3 five dollar bills, 2 quarters and 2 pennies, how much money do you have?
- 12) If you have 3 ten dollar bills, 1 five dollar bill and 1 one dollar bill, how much money do you have?

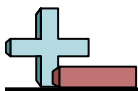
1. _____
2. _____
3. _____
4. _____
5. _____
6. _____
7. _____
8. _____
9. _____
10. _____
11. _____
12. _____

**Determine the amount of money described.****Answers**

82 ¢	\$52	88 ¢	\$32	42 ¢
98 ¢	\$15.75	\$27	\$36	\$0.42

- 1) If you have 3 ten dollar bills, 4 five dollar bills and 2 one dollar bills, how many dollars do you have?
- 2) If you have 2 five dollar bills, 2 ten dollar bills and 2 one dollar bills, how many dollars do you have?
- 3) If you have 1 five dollar bill, 2 one dollar bills and 2 ten dollar bills, how many dollars do you have?
- 4) If you have 3 ten dollar bills, 1 one dollar bill and 1 five dollar bill, how many dollars do you have?
- 5) If you have 3 quarters, 2 dimes and 3 pennies, how many cents do you have?
- 6) If you have 2 quarters, 3 dimes and 2 pennies, how many cents do you have?
- 7) If you have 1 quarter, 3 nickels and 2 pennies, how many cents do you have?
- 8) If you have 3 quarters, 2 nickels and 3 pennies, how many cents do you have?
- 9) If you have 1 ten dollar bill, 1 five dollar bill and 3 quarters, how much money do you have?
- 10) If you have 3 dimes, 2 nickels and 2 pennies, how much money do you have?

1. _____
2. _____
3. _____
4. _____
5. _____
6. _____
7. _____
8. _____
9. _____
10. _____

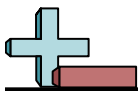


Determine the amount of money described.

Answers

- 1) If you have 3 one dollar bills, 3 ten dollar bills and 1 five dollar bill, how many dollars do you have?
- 2) If you have 4 one dollar bills, 2 ten dollar bills and 2 five dollar bills, how many dollars do you have?
- 3) If you have 1 ten dollar bill, 1 five dollar bill and 3 one dollar bills, how many dollars do you have?
- 4) If you have 1 ten dollar bill, 3 one dollar bills and 2 five dollar bills, how many dollars do you have?
- 5) If you have 2 quarters, 2 dimes and 1 nickel, how many cents do you have?
- 6) If you have 2 dimes, 3 nickels and 2 pennies, how many cents do you have?
- 7) If you have 3 quarters, 2 nickels and 2 pennies, how many cents do you have?
- 8) If you have 2 dimes, 2 nickels and 2 pennies, how many cents do you have?
- 9) If you have 2 ten dollar bills, 2 one dollar bills and 2 nickels, how much money do you have?
- 10) If you have 3 ten dollar bills, 2 five dollar bills and 1 dime, how much money do you have?
- 11) If you have 1 ten dollar bill, 4 five dollar bills and 3 pennies, how much money do you have?
- 12) If you have 4 one dollar bills, 3 nickels and 2 pennies, how much money do you have?

1. _____
2. _____
3. _____
4. _____
5. _____
6. _____
7. _____
8. _____
9. _____
10. _____
11. _____
12. _____



Determine the amount of money described.

Answers

- 1) If you have 3 one dollar bills, 3 ten dollar bills and 1 five dollar bill, how many dollars do you have?
- 2) If you have 4 one dollar bills, 2 ten dollar bills and 2 five dollar bills, how many dollars do you have?
- 3) If you have 1 ten dollar bill, 1 five dollar bill and 3 one dollar bills, how many dollars do you have?
- 4) If you have 1 ten dollar bill, 3 one dollar bills and 2 five dollar bills, how many dollars do you have?
- 5) If you have 2 quarters, 2 dimes and 1 nickel, how many cents do you have?
- 6) If you have 2 dimes, 3 nickels and 2 pennies, how many cents do you have?
- 7) If you have 3 quarters, 2 nickels and 2 pennies, how many cents do you have?
- 8) If you have 2 dimes, 2 nickels and 2 pennies, how many cents do you have?
- 9) If you have 2 ten dollar bills, 2 one dollar bills and 2 nickels, how much money do you have?
- 10) If you have 3 ten dollar bills, 2 five dollar bills and 1 dime, how much money do you have?
- 11) If you have 1 ten dollar bill, 4 five dollar bills and 3 pennies, how much money do you have?
- 12) If you have 4 one dollar bills, 3 nickels and 2 pennies, how much money do you have?

1. \$38
2. \$34
3. \$18
4. \$23
5. 75 ¢
6. 37 ¢
7. 87 ¢
8. 32 ¢
9. \$22.10
10. \$40.10
11. \$30.03
12. \$4.17



Determine the amount of money described.

Answers

87 ¢	\$34	\$18	37 ¢	\$23
\$22.10	\$38	75 ¢	32 ¢	\$40.10

1) If you have 3 one dollar bills, 3 ten dollar bills and 1 five dollar bill, how many dollars do you have?

1. _____

2) If you have 4 one dollar bills, 2 ten dollar bills and 2 five dollar bills, how many dollars do you have?

2. _____

3) If you have 1 ten dollar bill, 1 five dollar bill and 3 one dollar bills, how many dollars do you have?

3. _____

4) If you have 1 ten dollar bill, 3 one dollar bills and 2 five dollar bills, how many dollars do you have?

4. _____

5) If you have 2 quarters, 2 dimes and 1 nickel, how many cents do you have?

5. _____

6) If you have 2 dimes, 3 nickels and 2 pennies, how many cents do you have?

6. _____

7) If you have 3 quarters, 2 nickels and 2 pennies, how many cents do you have?

7. _____

8) If you have 2 dimes, 2 nickels and 2 pennies, how many cents do you have?

8. _____

9) If you have 2 ten dollar bills, 2 one dollar bills and 2 nickels, how much money do you have?

9. _____

10) If you have 3 ten dollar bills, 2 five dollar bills and 1 dime, how much money do you have?

10. _____



Determine the amount of money described.

Answers

1) If you have 4 ten dollar bills, 3 one dollar bills and 4 five dollar bills, how many dollars do you have?

1. _____

2) If you have 3 ten dollar bills, 3 five dollar bills and 1 one dollar bill, how many dollars do you have?

2. _____

3) If you have 3 five dollar bills, 1 one dollar bill and 4 ten dollar bills, how many dollars do you have?

3. _____

4) If you have 3 five dollar bills, 4 ten dollar bills and 3 one dollar bills, how many dollars do you have?

4. _____

5) If you have 3 quarters, 3 dimes and 1 penny, how many cents do you have?

5. _____

6) If you have 1 dime, 2 nickels and 2 pennies, how many cents do you have?

6. _____

7) If you have 1 dime, 2 nickels and 3 pennies, how many cents do you have?

7. _____

8) If you have 3 quarters, 1 dime and 1 nickel, how many cents do you have?

8. _____

9) If you have 2 five dollar bills, 2 dimes and 1 penny, how much money do you have?

9. _____

10) If you have 2 ten dollar bills, 4 nickels and 3 pennies, how much money do you have?

10. _____

11) If you have 4 ten dollar bills, 3 five dollar bills and 3 one dollar bills, how much money do you have?

11. _____

12) If you have 1 ten dollar bill, 3 quarters and 4 dimes, how much money do you have?

12. _____



Determine the amount of money described.

23 ¢	\$10.21	\$58	\$46	\$63
\$20.23	22 ¢	106 ¢	\$56	90 ¢

Answers

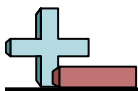
- 1) If you have 4 ten dollar bills, 3 one dollar bills and 4 five dollar bills, how many dollars do you have?
- 2) If you have 3 ten dollar bills, 3 five dollar bills and 1 one dollar bill, how many dollars do you have?
- 3) If you have 3 five dollar bills, 1 one dollar bill and 4 ten dollar bills, how many dollars do you have?
- 4) If you have 3 five dollar bills, 4 ten dollar bills and 3 one dollar bills, how many dollars do you have?
- 5) If you have 3 quarters, 3 dimes and 1 penny, how many cents do you have?
- 6) If you have 1 dime, 2 nickels and 2 pennies, how many cents do you have?
- 7) If you have 1 dime, 2 nickels and 3 pennies, how many cents do you have?
- 8) If you have 3 quarters, 1 dime and 1 nickel, how many cents do you have?
- 9) If you have 2 five dollar bills, 2 dimes and 1 penny, how much money do you have?
- 10) If you have 2 ten dollar bills, 4 nickels and 3 pennies, how much money do you have?

1. _____
2. _____
3. _____
4. _____
5. _____
6. _____
7. _____
8. _____
9. _____
10. _____

**Determine the amount of money described.****Answers**

- 1) If you have 1 five dollar bill, 4 ten dollar bills and 3 one dollar bills, how many dollars do you have?
- 2) If you have 2 ten dollar bills, 4 five dollar bills and 2 one dollar bills, how many dollars do you have?
- 3) If you have 4 ten dollar bills, 1 five dollar bill and 4 one dollar bills, how many dollars do you have?
- 4) If you have 4 five dollar bills, 2 one dollar bills and 1 ten dollar bill, how many dollars do you have?
- 5) If you have 3 dimes, 2 nickels and 1 penny, how many cents do you have?
- 6) If you have 1 quarter, 3 dimes and 1 nickel, how many cents do you have?
- 7) If you have 2 quarters, 3 dimes and 1 nickel, how many cents do you have?
- 8) If you have 2 quarters, 2 dimes and 2 nickels, how many cents do you have?
- 9) If you have 1 five dollar bill, 2 one dollar bills and 1 nickel, how much money do you have?
- 10) If you have 1 ten dollar bill, 1 dime and 4 nickels, how much money do you have?
- 11) If you have 2 one dollar bills, 1 dime and 2 pennies, how much money do you have?
- 12) If you have 1 ten dollar bill, 2 one dollar bills and 2 quarters, how much money do you have?

1. _____
2. _____
3. _____
4. _____
5. _____
6. _____
7. _____
8. _____
9. _____
10. _____
11. _____
12. _____



Determine the amount of money described.

Answers

85 ¢	\$32	\$49	\$42	41 ¢
\$7.05	80 ¢	\$10.30	60 ¢	\$48

1) If you have 1 five dollar bill, 4 ten dollar bills and 3 one dollar bills, how many dollars do you have?

1. _____

2) If you have 2 ten dollar bills, 4 five dollar bills and 2 one dollar bills, how many dollars do you have?

2. _____

3) If you have 4 ten dollar bills, 1 five dollar bill and 4 one dollar bills, how many dollars do you have?

3. _____

4) If you have 4 five dollar bills, 2 one dollar bills and 1 ten dollar bill, how many dollars do you have?

4. _____

5) If you have 3 dimes, 2 nickels and 1 penny, how many cents do you have?

5. _____

6) If you have 1 quarter, 3 dimes and 1 nickel, how many cents do you have?

6. _____

7) If you have 2 quarters, 3 dimes and 1 nickel, how many cents do you have?

7. _____

8) If you have 2 quarters, 2 dimes and 2 nickels, how many cents do you have?

8. _____

9) If you have 1 five dollar bill, 2 one dollar bills and 1 nickel, how much money do you have?

9. _____

10) If you have 1 ten dollar bill, 1 dime and 4 nickels, how much money do you have?

10. _____

**Determine the amount of money described.****Answers**

- 1) If you have 2 five dollar bills, 1 ten dollar bill and 3 one dollar bills, how many dollars do you have?
- 2) If you have 1 five dollar bill, 3 ten dollar bills and 1 one dollar bill, how many dollars do you have?
- 3) If you have 3 five dollar bills, 4 one dollar bills and 1 ten dollar bill, how many dollars do you have?
- 4) If you have 3 ten dollar bills, 3 five dollar bills and 4 one dollar bills, how many dollars do you have?
- 5) If you have 2 dimes, 1 nickel and 3 pennies, how many cents do you have?
- 6) If you have 1 quarter, 2 dimes and 3 pennies, how many cents do you have?
- 7) If you have 1 quarter, 1 dime and 1 nickel, how many cents do you have?
- 8) If you have 1 quarter, 1 dime and 2 pennies, how many cents do you have?
- 9) If you have 3 one dollar bills, 1 nickel and 4 pennies, how much money do you have?
- 10) If you have 2 quarters, 4 dimes and 1 nickel, how much money do you have?
- 11) If you have 4 ten dollar bills, 2 one dollar bills and 2 dimes, how much money do you have?
- 12) If you have 1 ten dollar bill, 1 five dollar bill and 2 quarters, how much money do you have?

1. _____
2. _____
3. _____
4. _____
5. _____
6. _____
7. _____
8. _____
9. _____
10. _____
11. _____
12. _____



Determine the amount of money described.

Answers

40 ¢	\$23	28 ¢	\$29	\$0.95
\$3.09	48 ¢	37 ¢	\$49	\$36

1) If you have 2 five dollar bills, 1 ten dollar bill and 3 one dollar bills, how many dollars do you have?

1. _____

2) If you have 1 five dollar bill, 3 ten dollar bills and 1 one dollar bill, how many dollars do you have?

2. _____

3) If you have 3 five dollar bills, 4 one dollar bills and 1 ten dollar bill, how many dollars do you have?

3. _____

4) If you have 3 ten dollar bills, 3 five dollar bills and 4 one dollar bills, how many dollars do you have?

4. _____

5) If you have 2 dimes, 1 nickel and 3 pennies, how many cents do you have?

5. _____

6) If you have 1 quarter, 2 dimes and 3 pennies, how many cents do you have?

6. _____

7) If you have 1 quarter, 1 dime and 1 nickel, how many cents do you have?

7. _____

8) If you have 1 quarter, 1 dime and 2 pennies, how many cents do you have?

8. _____

9) If you have 3 one dollar bills, 1 nickel and 4 pennies, how much money do you have?

9. _____

10) If you have 2 quarters, 4 dimes and 1 nickel, how much money do you have?

10. _____



Determine the amount of money described.

Answers

- 1) If you have 2 five dollar bills, 4 one dollar bills and 3 ten dollar bills, how many dollars do you have?
- 2) If you have 2 one dollar bills, 1 ten dollar bill and 2 five dollar bills, how many dollars do you have?
- 3) If you have 3 one dollar bills, 3 five dollar bills and 4 ten dollar bills, how many dollars do you have?
- 4) If you have 4 five dollar bills, 4 ten dollar bills and 1 one dollar bill, how many dollars do you have?
- 5) If you have 3 quarters, 2 nickels and 2 pennies, how many cents do you have?
- 6) If you have 3 quarters, 1 dime and 2 pennies, how many cents do you have?
- 7) If you have 3 dimes, 3 nickels and 3 pennies, how many cents do you have?
- 8) If you have 1 dime, 2 nickels and 2 pennies, how many cents do you have?
- 9) If you have 3 one dollar bills, 2 quarters and 2 pennies, how much money do you have?
- 10) If you have 3 quarters, 1 dime and 3 nickels, how much money do you have?
- 11) If you have 1 ten dollar bill, 2 five dollar bills and 4 quarters, how much money do you have?
- 12) If you have 2 five dollar bills, 1 one dollar bill and 4 pennies, how much money do you have?

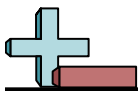
1. _____
2. _____
3. _____
4. _____
5. _____
6. _____
7. _____
8. _____
9. _____
10. _____
11. _____
12. _____



Determine the amount of money described.

Answers

- | | |
|---|--|
| <p>1) If you have 2 five dollar bills, 4 one dollar bills and 3 ten dollar bills, how many dollars do you have?</p> | <p>1. <u> \$44 </u></p> |
| <p>2) If you have 2 one dollar bills, 1 ten dollar bill and 2 five dollar bills, how many dollars do you have?</p> | <p>2. <u> \$22 </u></p> |
| <p>3) If you have 3 one dollar bills, 3 five dollar bills and 4 ten dollar bills, how many dollars do you have?</p> | <p>3. <u> \$58 </u></p> |
| <p>4) If you have 3 one dollar bills, 3 five dollar bills and 4 ten dollar bills, how many dollars do you have?</p> | <p>4. <u> \$61 </u></p> |
| <p>5) If you have 4 five dollar bills, 4 ten dollar bills and 1 one dollar bill, how many dollars do you have?</p> | <p>5. <u> 87 ¢ </u></p> |
| <p>6) If you have 4 five dollar bills, 4 ten dollar bills and 1 one dollar bill, how many dollars do you have?</p> | <p>6. <u> 87 ¢ </u></p> |
| <p>7) If you have 3 quarters, 2 nickels and 2 pennies, how many cents do you have?</p> | <p>7. <u> 48 ¢ </u></p> |
| <p>8) If you have 3 quarters, 2 nickels and 2 pennies, how many cents do you have?</p> | <p>8. <u> 22 ¢ </u></p> |
| <p>9) If you have 3 quarters, 1 dime and 2 pennies, how many cents do you have?</p> | <p>9. <u> \$3.52 </u></p> |
| <p>10) If you have 3 quarters, 1 dime and 2 pennies, how many cents do you have?</p> | <p>10. <u> \$1.00 </u></p> |
| <p>11) If you have 3 dimes, 3 nickels and 3 pennies, how many cents do you have?</p> | <p>11. <u> \$21.00 </u></p> |
| <p>12) If you have 1 dime, 2 nickels and 2 pennies, how many cents do you have?</p> | <p>12. <u> \$11.04 </u></p> |
| <p>9) If you have 3 one dollar bills, 2 quarters and 2 pennies, how much money do you have?</p> | |
| <p>10) If you have 3 quarters, 1 dime and 3 nickels, how much money do you have?</p> | |
| <p>11) If you have 1 ten dollar bill, 2 five dollar bills and 4 quarters, how much money do you have?</p> | |
| <p>12) If you have 2 five dollar bills, 1 one dollar bill and 4 pennies, how much money do you have?</p> | |



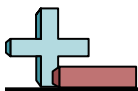
Determine the amount of money described.

Answers

\$58	87 ¢	\$61	48 ¢	\$22
22 ¢	87 ¢	\$44	\$3.52	\$1.00

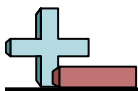
- 1) If you have 2 five dollar bills, 4 one dollar bills and 3 ten dollar bills, how many dollars do you have?
- 2) If you have 2 one dollar bills, 1 ten dollar bill and 2 five dollar bills, how many dollars do you have?
- 3) If you have 3 one dollar bills, 3 five dollar bills and 4 ten dollar bills, how many dollars do you have?
- 4) If you have 4 five dollar bills, 4 ten dollar bills and 1 one dollar bill, how many dollars do you have?
- 5) If you have 3 quarters, 2 nickels and 2 pennies, how many cents do you have?
- 6) If you have 3 quarters, 1 dime and 2 pennies, how many cents do you have?
- 7) If you have 3 dimes, 3 nickels and 3 pennies, how many cents do you have?
- 8) If you have 1 dime, 2 nickels and 2 pennies, how many cents do you have?
- 9) If you have 3 one dollar bills, 2 quarters and 2 pennies, how much money do you have?
- 10) If you have 3 quarters, 1 dime and 3 nickels, how much money do you have?

1. _____
2. _____
3. _____
4. _____
5. _____
6. _____
7. _____
8. _____
9. _____
10. _____

**Determine the amount of money described.****Answers**

- 1) If you have 3 five dollar bills, 2 ten dollar bills and 3 one dollar bills, how many dollars do you have?
- 2) If you have 1 ten dollar bill, 3 one dollar bills and 4 five dollar bills, how many dollars do you have?
- 3) If you have 3 ten dollar bills, 1 one dollar bill and 1 five dollar bill, how many dollars do you have?
- 4) If you have 3 ten dollar bills, 3 one dollar bills and 4 five dollar bills, how many dollars do you have?
- 5) If you have 1 quarter, 2 dimes and 2 nickels, how many cents do you have?
- 6) If you have 1 quarter, 3 dimes and 2 nickels, how many cents do you have?
- 7) If you have 1 dime, 1 nickel and 3 pennies, how many cents do you have?
- 8) If you have 1 dime, 1 nickel and 2 pennies, how many cents do you have?
- 9) If you have 3 ten dollar bills, 2 five dollar bills and 2 quarters, how much money do you have?
- 10) If you have 4 ten dollar bills, 3 quarters and 4 dimes, how much money do you have?
- 11) If you have 2 five dollar bills, 2 quarters and 4 nickels, how much money do you have?
- 12) If you have 2 one dollar bills, 1 quarter and 3 pennies, how much money do you have?

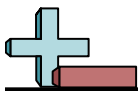
1. _____
2. _____
3. _____
4. _____
5. _____
6. _____
7. _____
8. _____
9. _____
10. _____
11. _____
12. _____



Determine the amount of money described.

Answers

- | | |
|---|---|
| <p>1) If you have 3 five dollar bills, 2 ten dollar bills and 3 one dollar bills, how many dollars do you have?</p> <p>2) If you have 1 ten dollar bill, 3 one dollar bills and 4 five dollar bills, how many dollars do you have?</p> <p>3) If you have 3 ten dollar bills, 1 one dollar bill and 1 five dollar bill, how many dollars do you have?</p> <p>4) If you have 3 ten dollar bills, 3 one dollar bills and 4 five dollar bills, how many dollars do you have?</p> <p>5) If you have 1 quarter, 2 dimes and 2 nickels, how many cents do you have?</p> <p>6) If you have 1 quarter, 3 dimes and 2 nickels, how many cents do you have?</p> <p>7) If you have 1 dime, 1 nickel and 3 pennies, how many cents do you have?</p> <p>8) If you have 1 dime, 1 nickel and 2 pennies, how many cents do you have?</p> <p>9) If you have 3 ten dollar bills, 2 five dollar bills and 2 quarters, how much money do you have?</p> <p>10) If you have 4 ten dollar bills, 3 quarters and 4 dimes, how much money do you have?</p> <p>11) If you have 2 five dollar bills, 2 quarters and 4 nickels, how much money do you have?</p> <p>12) If you have 2 one dollar bills, 1 quarter and 3 pennies, how much money do you have?</p> | <p>1. <u> \$38 </u></p> <p>2. <u> \$33 </u></p> <p>3. <u> \$36 </u></p> <p>4. <u> \$53 </u></p> <p>5. <u> 55 ¢ </u></p> <p>6. <u> 65 ¢ </u></p> <p>7. <u> 18 ¢ </u></p> <p>8. <u> 17 ¢ </u></p> <p>9. <u> \$40.50 </u></p> <p>10. <u> \$41.15 </u></p> <p>11. <u> \$10.70 </u></p> <p>12. <u> \$2.28 </u></p> |
|---|---|



Determine the amount of money described.

Answers

55 ¢	18 ¢	\$36	\$53	\$33
17 ¢	\$40.50	65 ¢	\$41.15	\$38

- 1) If you have 3 five dollar bills, 2 ten dollar bills and 3 one dollar bills, how many dollars do you have?
- 2) If you have 1 ten dollar bill, 3 one dollar bills and 4 five dollar bills, how many dollars do you have?
- 3) If you have 3 ten dollar bills, 1 one dollar bill and 1 five dollar bill, how many dollars do you have?
- 4) If you have 3 ten dollar bills, 3 one dollar bills and 4 five dollar bills, how many dollars do you have?
- 5) If you have 1 quarter, 2 dimes and 2 nickels, how many cents do you have?
- 6) If you have 1 quarter, 3 dimes and 2 nickels, how many cents do you have?
- 7) If you have 1 dime, 1 nickel and 3 pennies, how many cents do you have?
- 8) If you have 1 dime, 1 nickel and 2 pennies, how many cents do you have?
- 9) If you have 3 ten dollar bills, 2 five dollar bills and 2 quarters, how much money do you have?
- 10) If you have 4 ten dollar bills, 3 quarters and 4 dimes, how much money do you have?

1. _____
2. _____
3. _____
4. _____
5. _____
6. _____
7. _____
8. _____
9. _____
10. _____

**Determine the amount of money described.****Answers**

- 1) If you have 4 one dollar bills, 1 five dollar bill and 4 ten dollar bills, how many dollars do you have?
- 2) If you have 1 ten dollar bill, 2 one dollar bills and 1 five dollar bill, how many dollars do you have?
- 3) If you have 1 ten dollar bill, 1 one dollar bill and 4 five dollar bills, how many dollars do you have?
- 4) If you have 4 five dollar bills, 4 one dollar bills and 4 ten dollar bills, how many dollars do you have?
- 5) If you have 2 dimes, 1 nickel and 1 penny, how many cents do you have?
- 6) If you have 2 quarters, 3 nickels and 1 penny, how many cents do you have?
- 7) If you have 2 quarters, 1 dime and 2 nickels, how many cents do you have?
- 8) If you have 1 quarter, 1 nickel and 1 penny, how many cents do you have?
- 9) If you have 3 ten dollar bills, 1 nickel and 2 pennies, how much money do you have?
- 10) If you have 3 ten dollar bills, 1 one dollar bill and 4 nickels, how much money do you have?
- 11) If you have 1 five dollar bill, 3 nickels and 3 pennies, how much money do you have?
- 12) If you have 4 ten dollar bills, 4 quarters and 3 dimes, how much money do you have?

1. _____
2. _____
3. _____
4. _____
5. _____
6. _____
7. _____
8. _____
9. _____
10. _____
11. _____
12. _____



Determine the amount of money described.

- 1) If you have 4 one dollar bills, 1 five dollar bill and 4 ten dollar bills, how many dollars do you have?
- 2) If you have 1 ten dollar bill, 2 one dollar bills and 1 five dollar bill, how many dollars do you have?
- 3) If you have 1 ten dollar bill, 1 one dollar bill and 4 five dollar bills, how many dollars do you have?
- 4) If you have 4 five dollar bills, 4 one dollar bills and 4 ten dollar bills, how many dollars do you have?
- 5) If you have 2 dimes, 1 nickel and 1 penny, how many cents do you have?
- 6) If you have 2 quarters, 3 nickels and 1 penny, how many cents do you have?
- 7) If you have 2 quarters, 1 dime and 2 nickels, how many cents do you have?
- 8) If you have 1 quarter, 1 nickel and 1 penny, how many cents do you have?
- 9) If you have 3 ten dollar bills, 1 nickel and 2 pennies, how much money do you have?
- 10) If you have 3 ten dollar bills, 1 one dollar bill and 4 nickels, how much money do you have?
- 11) If you have 1 five dollar bill, 3 nickels and 3 pennies, how much money do you have?
- 12) If you have 4 ten dollar bills, 4 quarters and 3 dimes, how much money do you have?

Answers

1. \$49
2. \$17
3. \$31
4. \$64
5. 26 ¢
6. 66 ¢
7. 70 ¢
8. 31 ¢
9. \$30.07
10. \$31.20
11. \$5.18
12. \$41.30



Determine the amount of money described.

Answers

\$49	31 ¢	70 ¢	\$31.20	\$17
66 ¢	\$31	\$30.07	\$64	26 ¢

1) If you have 4 one dollar bills, 1 five dollar bill and 4 ten dollar bills, how many dollars do you have?

1. _____

2) If you have 1 ten dollar bill, 2 one dollar bills and 1 five dollar bill, how many dollars do you have?

2. _____

3) If you have 1 ten dollar bill, 1 one dollar bill and 4 five dollar bills, how many dollars do you have?

3. _____

4) If you have 4 five dollar bills, 4 one dollar bills and 4 ten dollar bills, how many dollars do you have?

4. _____

5) If you have 2 dimes, 1 nickel and 1 penny, how many cents do you have?

5. _____

6) If you have 2 quarters, 3 nickels and 1 penny, how many cents do you have?

6. _____

7) If you have 2 quarters, 1 dime and 2 nickels, how many cents do you have?

7. _____

8) If you have 1 quarter, 1 nickel and 1 penny, how many cents do you have?

8. _____

9) If you have 3 ten dollar bills, 1 nickel and 2 pennies, how much money do you have?

9. _____

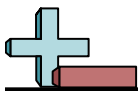
10) If you have 3 ten dollar bills, 1 one dollar bill and 4 nickels, how much money do you have?

10. _____

**Determine the amount of money described.****Answers**

- 1) If you have 1 ten dollar bill, 4 five dollar bills and 4 one dollar bills, how many dollars do you have?
- 2) If you have 4 ten dollar bills, 4 one dollar bills and 2 five dollar bills, how many dollars do you have?
- 3) If you have 2 one dollar bills, 1 five dollar bill and 1 ten dollar bill, how many dollars do you have?
- 4) If you have 3 one dollar bills, 2 five dollar bills and 3 ten dollar bills, how many dollars do you have?
- 5) If you have 3 quarters, 3 dimes and 3 pennies, how many cents do you have?
- 6) If you have 3 dimes, 1 nickel and 1 penny, how many cents do you have?
- 7) If you have 3 quarters, 3 dimes and 2 nickels, how many cents do you have?
- 8) If you have 3 quarters, 1 dime and 1 nickel, how many cents do you have?
- 9) If you have 4 ten dollar bills, 2 dimes and 1 nickel, how much money do you have?
- 10) If you have 2 five dollar bills, 3 dimes and 4 nickels, how much money do you have?
- 11) If you have 2 five dollar bills, 4 quarters and 1 dime, how much money do you have?
- 12) If you have 2 quarters, 1 nickel and 3 pennies, how much money do you have?

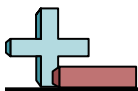
1. _____
2. _____
3. _____
4. _____
5. _____
6. _____
7. _____
8. _____
9. _____
10. _____
11. _____
12. _____



Determine the amount of money described.

Answers

- | | |
|---|--|
| <p>1) If you have 1 ten dollar bill, 4 five dollar bills and 4 one dollar bills, how many dollars do you have?</p> | <p>1. <u> \$34 </u></p> |
| <p>2) If you have 4 ten dollar bills, 4 one dollar bills and 2 five dollar bills, how many dollars do you have?</p> | <p>2. <u> \$54 </u></p> |
| <p>3) If you have 2 one dollar bills, 1 five dollar bill and 1 ten dollar bill, how many dollars do you have?</p> | <p>3. <u> \$17 </u></p> |
| <p>4) If you have 2 one dollar bills, 1 five dollar bill and 1 ten dollar bill, how many dollars do you have?</p> | <p>4. <u> \$43 </u></p> |
| <p>5) If you have 3 one dollar bills, 2 five dollar bills and 3 ten dollar bills, how many dollars do you have?</p> | <p>5. <u> 108 ¢ </u></p> |
| <p>6) If you have 3 one dollar bills, 2 five dollar bills and 3 ten dollar bills, how many dollars do you have?</p> | <p>6. <u> 36 ¢ </u></p> |
| <p>7) If you have 3 quarters, 3 dimes and 3 pennies, how many cents do you have?</p> | <p>7. <u> 115 ¢ </u></p> |
| <p>8) If you have 3 quarters, 3 dimes and 3 pennies, how many cents do you have?</p> | <p>8. <u> 90 ¢ </u></p> |
| <p>9) If you have 3 dimes, 1 nickel and 1 penny, how many cents do you have?</p> | <p>9. <u> \$40.25 </u></p> |
| <p>10) If you have 3 dimes, 1 nickel and 1 penny, how many cents do you have?</p> | <p>10. <u> \$10.50 </u></p> |
| <p>11) If you have 3 quarters, 3 dimes and 2 nickels, how many cents do you have?</p> | <p>11. <u> \$11.10 </u></p> |
| <p>12) If you have 3 quarters, 1 dime and 1 nickel, how many cents do you have?</p> | <p>12. <u> \$0.58 </u></p> |
| <p>9) If you have 4 ten dollar bills, 2 dimes and 1 nickel, how much money do you have?</p> | |
| <p>10) If you have 2 five dollar bills, 3 dimes and 4 nickels, how much money do you have?</p> | |
| <p>11) If you have 2 five dollar bills, 4 quarters and 1 dime, how much money do you have?</p> | |
| <p>12) If you have 2 quarters, 1 nickel and 3 pennies, how much money do you have?</p> | |



Determine the amount of money described.

Answers

\$17	108 ¢	\$10.50	115 ¢	\$43
36 ¢	\$54	\$34	\$40.25	90 ¢

1) If you have 1 ten dollar bill, 4 five dollar bills and 4 one dollar bills, how many dollars do you have?

1. _____

2) If you have 4 ten dollar bills, 4 one dollar bills and 2 five dollar bills, how many dollars do you have?

2. _____

3) If you have 2 one dollar bills, 1 five dollar bill and 1 ten dollar bill, how many dollars do you have?

3. _____

4) If you have 3 one dollar bills, 2 five dollar bills and 3 ten dollar bills, how many dollars do you have?

4. _____

5) If you have 3 quarters, 3 dimes and 3 pennies, how many cents do you have?

5. _____

6) If you have 3 dimes, 1 nickel and 1 penny, how many cents do you have?

6. _____

7) If you have 3 quarters, 3 dimes and 2 nickels, how many cents do you have?

7. _____

8) If you have 3 quarters, 1 dime and 1 nickel, how many cents do you have?

8. _____

9) If you have 4 ten dollar bills, 2 dimes and 1 nickel, how much money do you have?

9. _____

10) If you have 2 five dollar bills, 3 dimes and 4 nickels, how much money do you have?

10. _____